


N. Gregory Mankiw

Principles of
Economics
Sixth Edition

21

The Theory of Consumer
Choice

Premium
PowerPoint
Slides by
Modified by Joseph Tao-yi Wang
Ron Cronovich



© 2012 Cengage Learning. All Rights Reserved. May not be copied, scanned, or duplicated, in whole or in part, except for use as permitted in a license distributed with a certain product or service or otherwise via a password-protected website for classroom use.

In this chapter,

look for the answers to these questions:

- How does the budget constraint represent the choices a consumer can afford?
- How do indifference curves represent the consumer's preferences?
- What determines how a consumer divides her resources between two goods?
- How does the theory of consumer choice explain decisions such as how much a consumer saves, or how much labor she supplies?

© 2012 Cengage Learning. All Rights Reserved. May not be copied, scanned, or duplicated, in whole or in part, except for use as permitted in a license distributed with a certain product or service or otherwise via a password-protected website for classroom use.

1

Introduction

- Recall one of the Ten Principles from Chapter 1: **People face tradeoffs.**
 - Buying more of one good leaves less income to buy other goods.
 - Working more hours means more income and more consumption, but less leisure time.
 - Reducing saving allows more consumption today but reduces future consumption.
- This chapter explores how consumers make choices like these.

© 2012 Cengage Learning. All Rights Reserved. May not be copied, scanned, or duplicated, in whole or in part, except for use as permitted in a license distributed with a certain product or service or otherwise via a password-protected website for classroom use.

2

The Budget Constraint: What the Consumer Can Afford

- Example:
Hurley divides his income between two goods: fish and mangos.
- A "consumption bundle" is a particular combination of the goods, e.g., 40 fish & 300 mangos.
- **Budget constraint:** the limit on the consumption bundles that a consumer can afford

© 2012 Cengage Learning. All Rights Reserved. May not be copied, scanned, or duplicated, in whole or in part, except for use as permitted in a license distributed with a certain product or service or otherwise via a password-protected website for classroom use.

3

ACTIVE LEARNING 1 The budget constraint

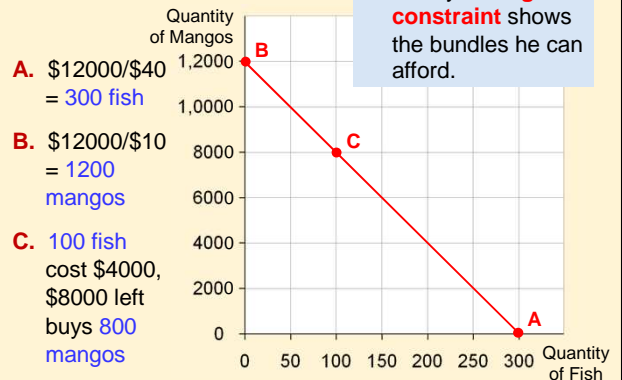
Hurley's income: \$12,000

Prices: $P_F = \$40$ per fish, $P_M = \$10$ per mango

- If Hurley spends all his income on fish, how many fish does he buy?
- If Hurley spends all his income on mangos, how many mangos does he buy?
- If Hurley buys 100 fish, how many mangos can he buy?
- Plot each of the bundles from parts A – C on a graph that measures fish on the horizontal axis and mangos on the vertical, connect the dots.

© 2012 Cengage Learning. All Rights Reserved. May not be copied, scanned, or duplicated, in whole or in part, except for use as permitted in a license distributed with a certain product or service or otherwise via a password-protected website for classroom use.

ACTIVE LEARNING 1 Answers



© 2012 Cengage Learning. All Rights Reserved. May not be copied, scanned, or duplicated, in whole or in part, except for use as permitted in a license distributed with a certain product or service or otherwise via a password-protected website for classroom use.

The Slope of the Budget Constraint

From **C** to **D**,
 "rise" = -200 mangos
 "run" = +50 fish
 Slope = -4
 Hurley must give up 4 mangos to get one fish.

The slope of the budget constraint equals the relative price of the good on the X axis.

© 2012 Cengage Learning. All Rights Reserved. May not be copied, scanned, or duplicated, in whole or in part, except for use as permitted in a license distributed with a certain product or service or otherwise on a password-protected website for classroom use.

ACTIVE LEARNING 2

Budget constraint, continued

Show what happens to Hurley's budget constraint if:

- A.** His income falls to \$8,000.
- B.** The price of mangos rises to $P_M = \$20$ per mango

© 2012 Cengage Learning. All Rights Reserved. May not be copied, scanned, or duplicated, in whole or in part, except for use as permitted in a license distributed with a certain product or service or otherwise on a password-protected website for classroom use.

ACTIVE LEARNING 2

Answers, part A

Now, Hurley can buy
 $\$8,000 / \$40 = 200$ fish
 or
 $\$8,000 / \$10 = 800$ mangos
 or any combination in between.

A fall in income shifts the budget constraint down.

© 2012 Cengage Learning. All Rights Reserved. May not be copied, scanned, or duplicated, in whole or in part, except for use as permitted in a license distributed with a certain product or service or otherwise on a password-protected website for classroom use.

ACTIVE LEARNING 2

Answers, part B

Hurley can still buy 300 fish.
 But now he can only buy $\$12,000 / \$20 = 600$ mangos.
 Notice: slope is smaller, relative price of fish is now only 2 mangos.

An increase in the price of one good pivots the budget constraint inward.

© 2012 Cengage Learning. All Rights Reserved. May not be copied, scanned, or duplicated, in whole or in part, except for use as permitted in a license distributed with a certain product or service or otherwise on a password-protected website for classroom use.

Preferences: What the Consumer Wants

Indifference curve: shows consumption bundles that give the consumer the same level of satisfaction

A, B, and all other bundles on I_1 make Hurley equally happy: he is *indifferent* between them.

One of Hurley's indifference curves

© 2012 Cengage Learning. All Rights Reserved. May not be copied, scanned, or duplicated, in whole or in part, except for use as permitted in a license distributed with a certain product or service or otherwise on a password-protected website for classroom use.

Four Properties of Indifference Curves

1. Indifference curves are downward-sloping.

If the quantity of fish is reduced, the quantity of mangos must be increased to keep Hurley equally happy.

One of Hurley's indifference curves

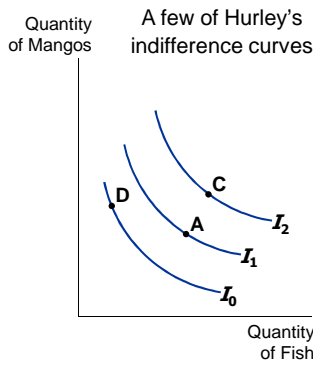
© 2012 Cengage Learning. All Rights Reserved. May not be copied, scanned, or duplicated, in whole or in part, except for use as permitted in a license distributed with a certain product or service or otherwise on a password-protected website for classroom use.

Four Properties of Indifference Curves

2. Higher indifference curves are preferred to lower ones.

Hurley prefers every bundle on I_2 (like C) to every bundle on I_1 (like A).

He prefers every bundle on I_1 (like A) to every bundle on I_0 (like D).



Four Properties of Indifference Curves

3. Indifference curves cannot cross.

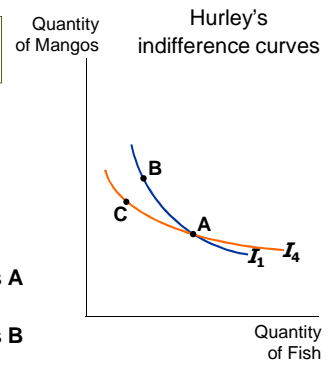
Suppose they did.

Hurley should prefer B to C, since B has more of both goods.

Yet, Hurley is indifferent between B and C:

He likes C as much as A (both are on I_4).

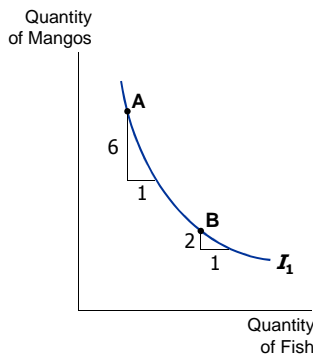
He likes A as much as B (both are on I_1).



Four Properties of Indifference Curves

4. Indifference curves are bowed inward.

Hurley is willing to give up more mangos for a fish if he has few fish (A) than if he has many (B).



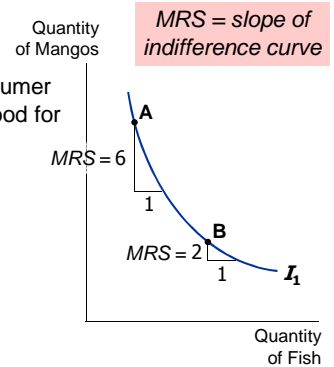
The Marginal Rate of Substitution

Marginal rate of substitution (MRS):

the rate at which a consumer is willing to trade one good for another.

Hurley's MRS is the amount of mangos he would substitute for another fish.

MRS falls as you move down along an indifference curve.

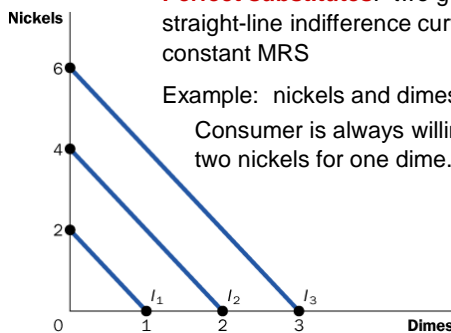


One Extreme Case: Perfect Substitutes

Perfect substitutes: two goods with straight-line indifference curves, constant MRS

Example: nickels and dimes

Consumer is always willing to trade two nickels for one dime.



Another Extreme Case: Perfect Complements

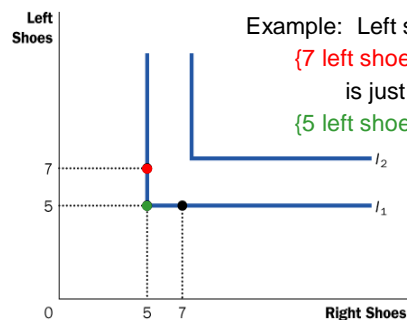
Perfect complements: two goods with right-angle indifference curves

Example: Left shoes, right shoes

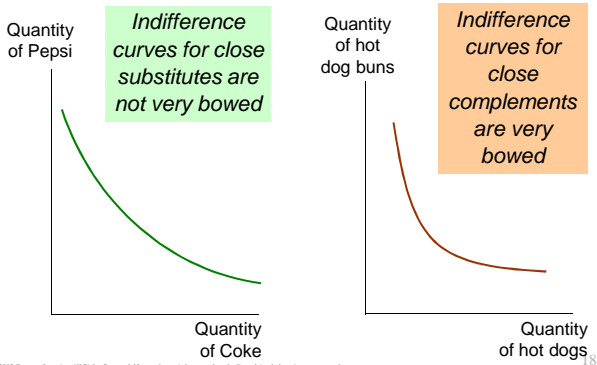
{7 left shoes, 5 right shoes}

is just as good as

{5 left shoes, 5 right shoes}



Less Extreme Cases: Close Substitutes and Close Complements



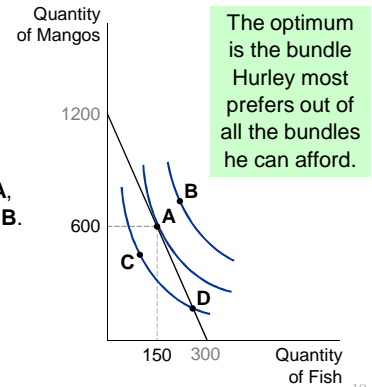
© 2012 Cengage Learning. All Rights Reserved. May not be copied, scanned, or duplicated, in whole or in part, except for use as permitted in a license distributed with a certain product or service or otherwise in a password-protected website for classroom use.

Optimization: What the Consumer Chooses

A is the *optimum*: the point on the budget constraint that touches the highest possible indifference curve.

Hurley prefers B to A, but he cannot afford B.

Hurley can afford C and D, but A is on a higher indifference curve.



© 2012 Cengage Learning. All Rights Reserved. May not be copied, scanned, or duplicated, in whole or in part, except for use as permitted in a license distributed with a certain product or service or otherwise in a password-protected website for classroom use.

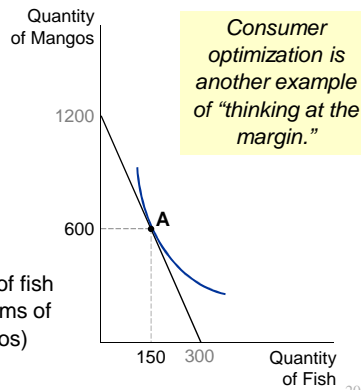
Optimization: What the Consumer Chooses

At the optimum, slope of the indifference curve equals slope of the budget constraint:

$$MRS = P_F/P_M$$

marginal value of fish (in terms of mangos)

price of fish (in terms of mangos)

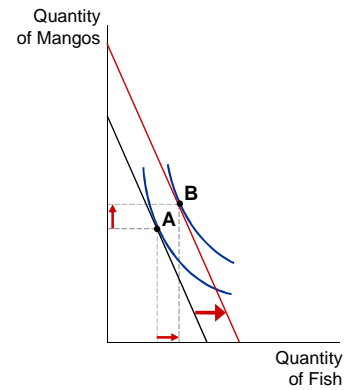


© 2012 Cengage Learning. All Rights Reserved. May not be copied, scanned, or duplicated, in whole or in part, except for use as permitted in a license distributed with a certain product or service or otherwise in a password-protected website for classroom use.

The Effects of an Increase in Income

An increase in income shifts the budget constraint outward.

If both goods are "normal," Hurley buys more of each.



© 2012 Cengage Learning. All Rights Reserved. May not be copied, scanned, or duplicated, in whole or in part, except for use as permitted in a license distributed with a certain product or service or otherwise in a password-protected website for classroom use.

ACTIVE LEARNING 3

Inferior vs. normal goods

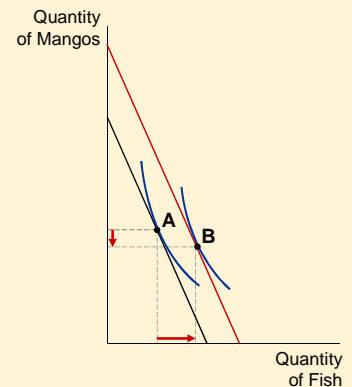
- An increase in income increases the quantity demanded of **normal goods** and reduces the quantity demanded of **inferior goods**.
- Suppose fish is a normal good but mangos are an inferior good.
- Use a diagram to show the effects of an increase in income on Hurley's optimal bundle of fish and mangos.

© 2012 Cengage Learning. All Rights Reserved. May not be copied, scanned, or duplicated, in whole or in part, except for use as permitted in a license distributed with a certain product or service or otherwise in a password-protected website for classroom use.

ACTIVE LEARNING 3

Answers

If mangos are inferior, the new optimum will contain fewer mangos.

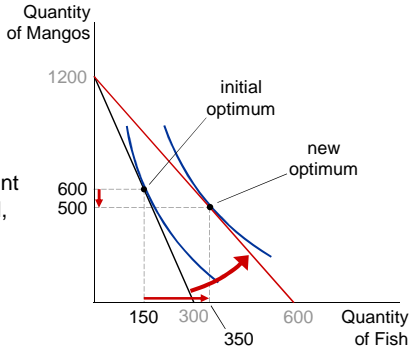


© 2012 Cengage Learning. All Rights Reserved. May not be copied, scanned, or duplicated, in whole or in part, except for use as permitted in a license distributed with a certain product or service or otherwise in a password-protected website for classroom use.

The Effects of a Price Change

Initially,
 $P_F = \$40$
 $P_M = \$10$

P_F falls to \$20
 budget constraint rotates outward,
 Hurley buys more fish and fewer mangos.



© 2012 Cengage Learning. All Rights Reserved. May not be copied, scanned, or duplicated, in whole or in part, except for use as permitted in a license distributed with a certain product or service or otherwise in a password-protected online learning environment.

The Income and Substitution Effects

A fall in the price of fish has two effects on Hurley's optimal consumption of both goods.

- **Income effect**
 A fall in P_F boosts the purchasing power of Hurley's income, allows him to buy more mangos and more fish.
- **Substitution effect**
 A fall in P_F makes mangos more expensive relative to fish, causes Hurley to buy fewer mangos and more fish.

Notice: *The net effect on mangos is ambiguous.*

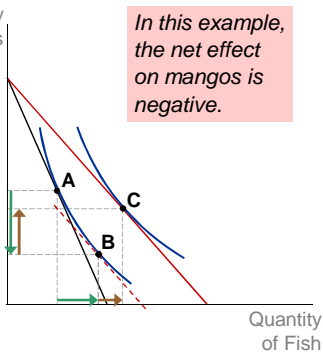
© 2012 Cengage Learning. All Rights Reserved. May not be copied, scanned, or duplicated, in whole or in part, except for use as permitted in a license distributed with a certain product or service or otherwise in a password-protected online learning environment.

The Income and Substitution Effects

Initial optimum at A.
 P_F falls.

Substitution effect:
 from A to B,
 buy more fish and fewer mangos.

Income effect:
 from B to C,
 buy more of both goods.



In this example, the net effect on mangos is negative.

© 2012 Cengage Learning. All Rights Reserved. May not be copied, scanned, or duplicated, in whole or in part, except for use as permitted in a license distributed with a certain product or service or otherwise in a password-protected online learning environment.

ACTIVE LEARNING 4 The substitution effect in two cases

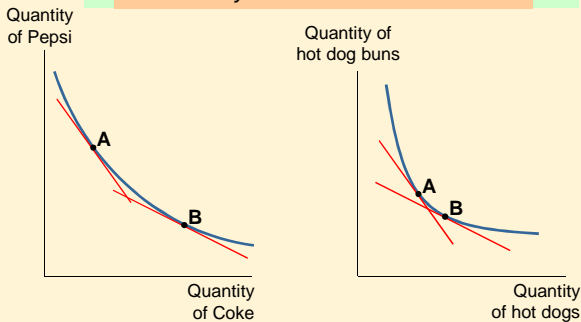
Do you think the substitution effect would be bigger for substitutes or complements?

- Draw an indifference curve for Coke and Pepsi, and, on a separate graph, one for hot dogs and hot dog buns.
- On each graph, show the effects of a relative price change (keeping the consumer on the initial indifference curve).

© 2012 Cengage Learning. All Rights Reserved. May not be copied, scanned, or duplicated, in whole or in part, except for use as permitted in a license distributed with a certain product or service or otherwise in a password-protected online learning environment.

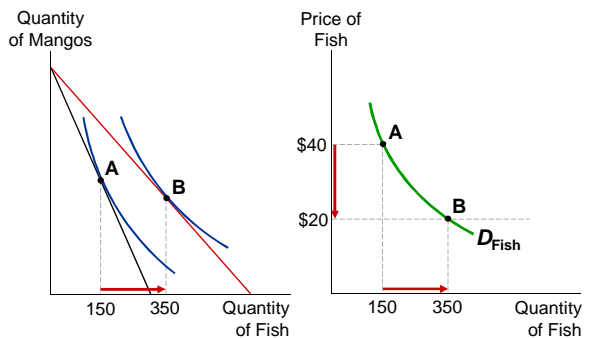
ACTIVE LEARNING 4 Answers

B) In both graphs, the relative price changes by the same amount.



Deriving Hurley's Demand Curve for Fish

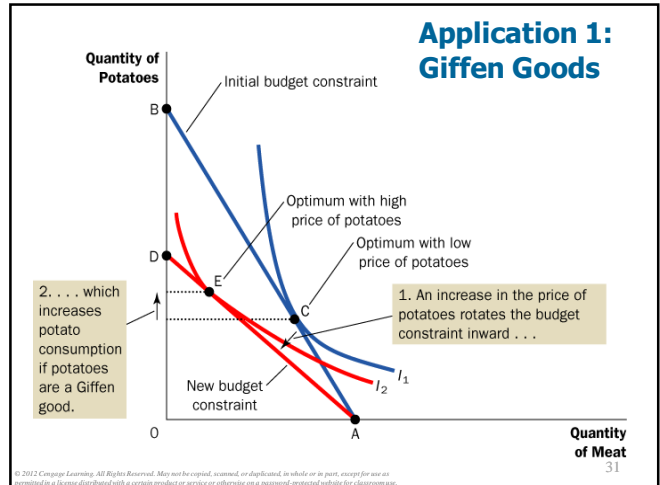
BA: When $P_F = \$20$, Hurley demands 350 fish.



© 2012 Cengage Learning. All Rights Reserved. May not be copied, scanned, or duplicated, in whole or in part, except for use as permitted in a license distributed with a certain product or service or otherwise in a password-protected online learning environment.

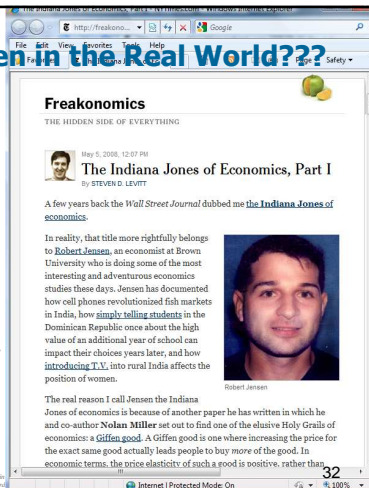
Application 1: Giffen Goods

- Do all goods obey the *Law of Demand*?
- Suppose the goods are potatoes and meat, and potatoes are an inferior good.
 - If price of potatoes rises,
 - substitution effect: buy less potatoes
 - income effect: buy more potatoes
 - If income effect > substitution effect, then potatoes are a **Giffen good**, a good for which an increase in price raises the quantity demanded.



Could This Happen in the Real World???

- Do Giffen goods actually exist?
- Jensen, Robert T., and Nolan H. Miller (2008), "Giffen Behavior and Subsistence Consumption." *American Economic Review*, 98(4): 1553–77.



Application 2: Wages and Labor Supply

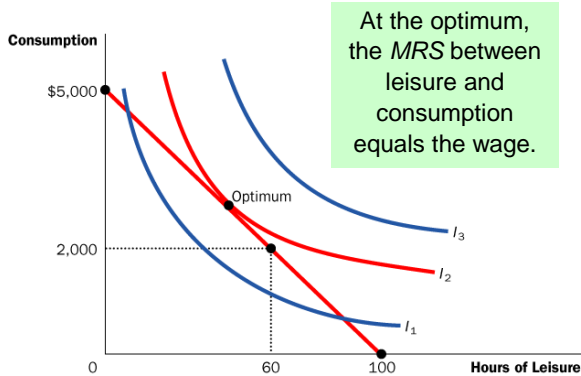
Budget constraint

- Shows a person's tradeoff between consumption and leisure.
- Depends on how much time she has to divide between leisure and working.
- The relative price of an hour of leisure is the amount of consumption she could buy with an hour's wages.

Indifference curve

- Shows "bundles" of consumption and leisure that give her the same level of satisfaction.

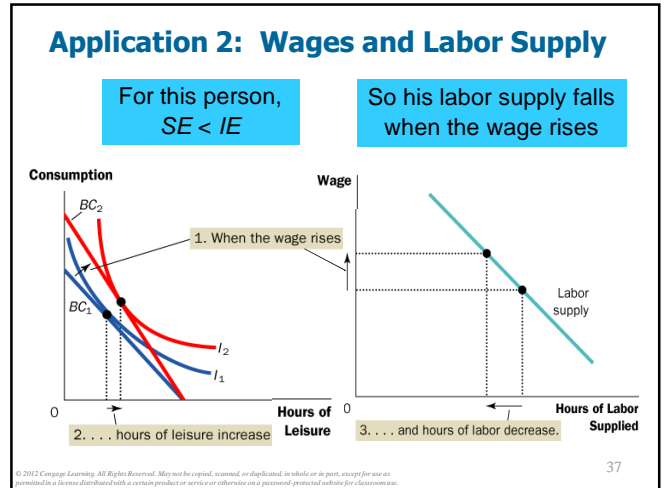
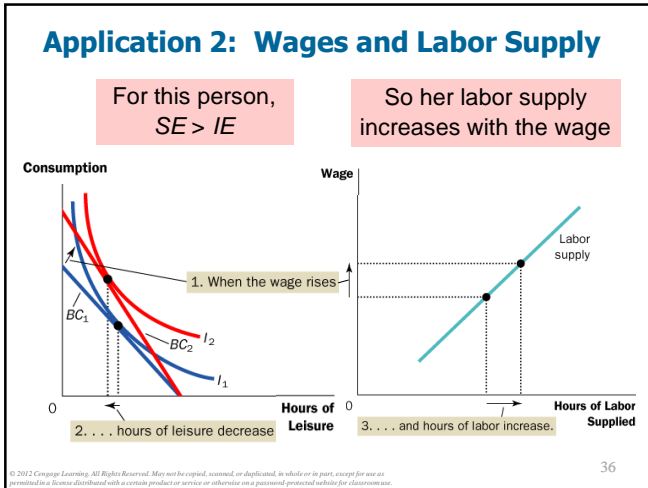
Application 2: Wages and Labor Supply



Application 2: Wages and Labor Supply

An increase in the wage has two effects on the optimal quantity of labor supplied.

- Substitution effect (SE):** A higher wage makes leisure more expensive relative to consumption. The person chooses less leisure, i.e., increases quantity of labor supplied.
- Income effect (IE):** With a higher wage, she can afford more of both "goods." She chooses more leisure, i.e., reduces quantity of labor supplied.



Could This Happen in the Real World???

Cases where the income effect on labor supply is very strong:

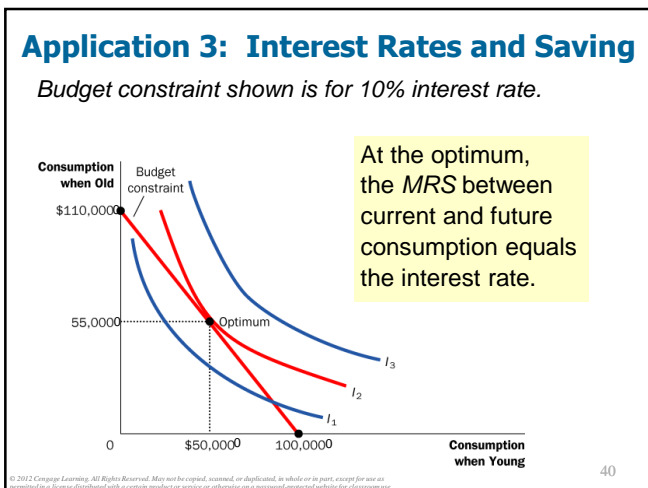
- Over last 100 years, technological progress has increased labor demand and real wages. The average workweek fell from 6 to 5 days.
- When a person wins the lottery or receives an inheritance, his wage is unchanged—hence no substitution effect. But such persons are more likely to work fewer hours, indicating a strong income effect.

38

Application 3: Interest Rates and Saving

- A person lives for two periods.
 - Period 1: young, works, earns \$1,000,000
consumption = \$1,000,000 minus amount saved
 - Period 2: old, retired
consumption = saving from Period 1 plus interest earned on saving
- The interest rate determines the relative price of consumption when young in terms of consumption when old.

39



ACTIVE LEARNING 5

A change in the interest rate

- Suppose the interest rate rises.
- Describe the income and substitution effects on current and future consumption, and on saving.

41

ACTIVE LEARNING 5

Answers

The interest rate rises.

Substitution effect

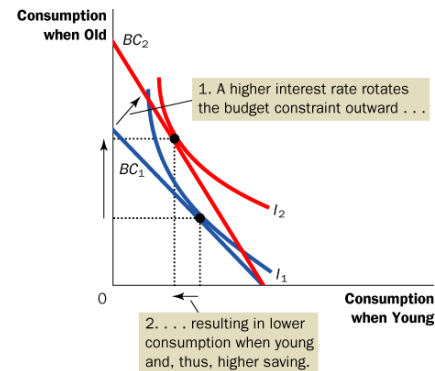
- Current consumption becomes more expensive relative to future consumption.
- Current consumption falls, saving rises, future consumption rises.

Income effect

- Can afford more consumption in both the present and the future. Saving falls.

© 2012 Cengage Learning. All Rights Reserved. May not be copied, scanned, or duplicated, in whole or in part, except for use as permitted in a license distributed with a certain product or service or otherwise in a password-protected website for classroom use.

Application 3: Interest Rates and Saving

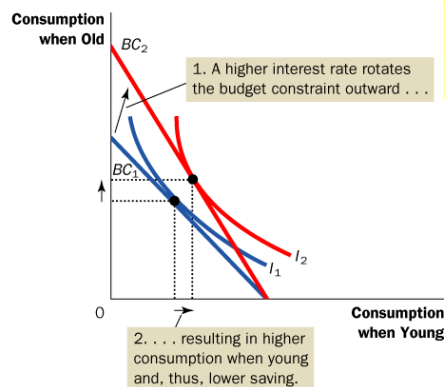


In this case,
 $SE > IE$ and
saving rises

© 2012 Cengage Learning. All Rights Reserved. May not be copied, scanned, or duplicated, in whole or in part, except for use as permitted in a license distributed with a certain product or service or otherwise in a password-protected website for classroom use.

43

Application 3: Interest Rates and Saving



In this case,
 $SE < IE$ and
saving falls

© 2012 Cengage Learning. All Rights Reserved. May not be copied, scanned, or duplicated, in whole or in part, except for use as permitted in a license distributed with a certain product or service or otherwise in a password-protected website for classroom use.

44

CONCLUSION:

Do People Really Think This Way?

- People do not make spending decisions by writing down their budget constraints and indifference curves.
- Yet, they try to make the choices that maximize their satisfaction given their limited resources.
- The theory in this chapter is only intended as a metaphor for how consumers make decisions.
- It explains consumer behavior fairly well in many situations and provides the basis for more advanced economic analysis.

© 2012 Cengage Learning. All Rights Reserved. May not be copied, scanned, or duplicated, in whole or in part, except for use as permitted in a license distributed with a certain product or service or otherwise in a password-protected website for classroom use.

45

SUMMARY

- A consumer's budget constraint shows the possible combinations of different goods she can buy given her income and the prices of the goods. The slope of the budget constraint equals the relative price of the goods.
- An increase in income shifts the budget constraint outward. A change in the price of one of the goods pivots the budget constraint.

© 2012 Cengage Learning. All Rights Reserved. May not be copied, scanned, or duplicated, in whole or in part, except for use as permitted in a license distributed with a certain product or service or otherwise in a password-protected website for classroom use.

SUMMARY

- A consumer's indifference curves represent her preferences. An indifference curve shows all the bundles that give the consumer a certain level of happiness. The consumer prefers points on higher indifference curves to points on lower ones.
- The slope of an indifference curve at any point is the marginal rate of substitution—the rate at which the consumer is willing to trade one good for the other.

© 2012 Cengage Learning. All Rights Reserved. May not be copied, scanned, or duplicated, in whole or in part, except for use as permitted in a license distributed with a certain product or service or otherwise in a password-protected website for classroom use.

SUMMARY

- The consumer optimizes by choosing the point on her budget constraint that lies on the highest indifference curve. At this point, the marginal rate of substitution equals the relative price of the two goods.
- When the price of a good falls, the impact on the consumer's choices can be broken down into two effects, an income effect and a substitution effect.

© 2012 Cengage Learning. All Rights Reserved. May not be copied, scanned, or duplicated, in whole or in part, except for use as permitted in a license distributed with a certain product or service or otherwise as a part of your account for Cengage.com.

SUMMARY

- The income effect is the change in consumption that arises because a lower price makes the consumer better off. It is represented by a movement from a lower indifference curve to a higher one.
- The substitution effect is the change that arises because a price change encourages greater consumption of the good that has become relatively cheaper. It is represented by a movement along an indifference curve.

© 2012 Cengage Learning. All Rights Reserved. May not be copied, scanned, or duplicated, in whole or in part, except for use as permitted in a license distributed with a certain product or service or otherwise as a part of your account for Cengage.com.

SUMMARY

- The theory of consumer choice can be applied in many situations. It can explain why demand curves can potentially slope upward, why higher wages could either increase or decrease labor supply, and why higher interest rates could either increase or decrease saving.

© 2012 Cengage Learning. All Rights Reserved. May not be copied, scanned, or duplicated, in whole or in part, except for use as permitted in a license distributed with a certain product or service or otherwise as a part of your account for Cengage.com.

Indifference Curve Analysis

- Budget Constraint
- Indifference Curve
 - MRS
- Optimal Choice at $MRS = P_1 / P_2$
 - Substitution Effect + Income Effect
- Homework: Mankiw, Ch.21, pp. 463-465, Problem 7, 11, 12, 13, 15

© 2012 Cengage Learning. All Rights Reserved. May not be copied, scanned, or duplicated, in whole or in part, except for use as permitted in a license distributed with a certain product or service or otherwise as a part of your account for Cengage.com.

51